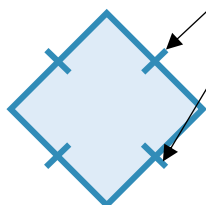


# Rotational Symmetry

Find the order of rotation for the following shapes:

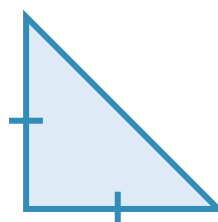
**Hint:** Sides marked with these lines are the same size.

a)



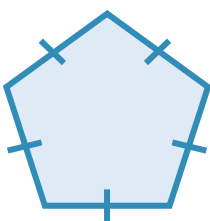
Order of \_\_\_\_\_

b)



Order of \_\_\_\_\_

c)



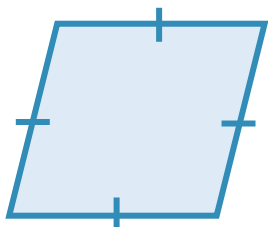
Order of \_\_\_\_\_

d)



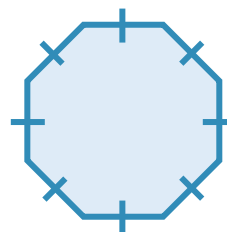
Order of \_\_\_\_\_

e)



Order of \_\_\_\_\_

f)



Order of \_\_\_\_\_