

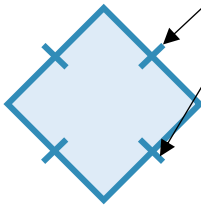
# Rotational Symmetry

## Answers

Find the order of rotation for the following shapes:

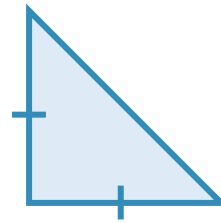
**Hint:** Sides marked with these lines are the same size.

a)



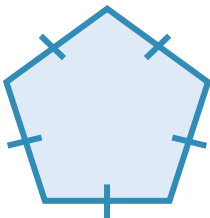
Order of **4**

b)



Order of **1**

c)



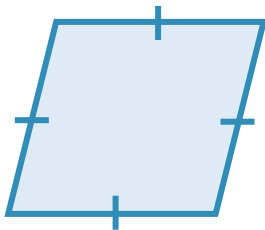
Order of **5**

d)



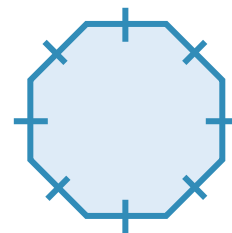
Order of **2**

e)



Order of **2**

f)



Order of **8**