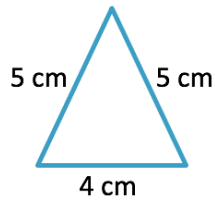


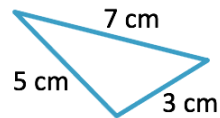
Area of a Triangle with Three Known Sides

Use Heron's formula to find the area of the following triangles:

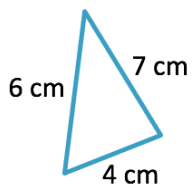
a)



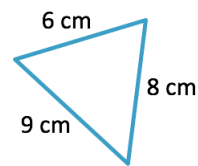
b)



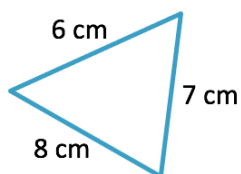
c)



d)



e)



f)

