


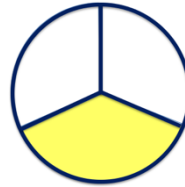
Identifying Fractions

Write down the fractions shown below.


a)




b)




c)




d)




e)



f)



g)



h)

