


Multiplication as Repeated Addition

Write the following as a repeated addition and then as a multiplication


e.g. Number of legs



$$2 + 2 + 2 + 2 + 2 + 2 = 12$$

$$6 \times 2 = 12$$

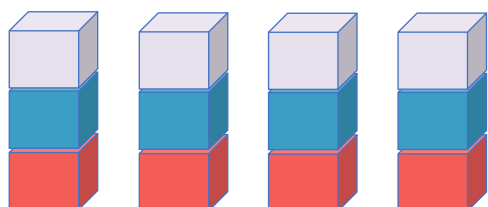
a) Number of wheels



Repeated addition:

Multiplication:

b) Number of cubes



Repeated addition:

Multiplication:

c) Number of legs



Repeated addition:

Multiplication:

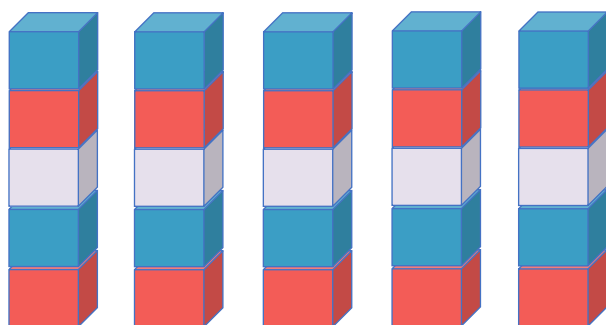
d) Number of eggs



Repeated addition:

Multiplication:

e) Number of cubes



Repeated addition:

Multiplication: