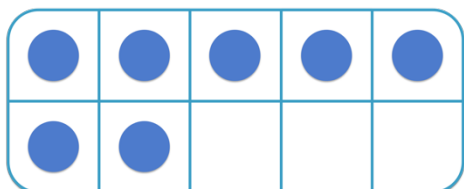


Number Bonds to 10

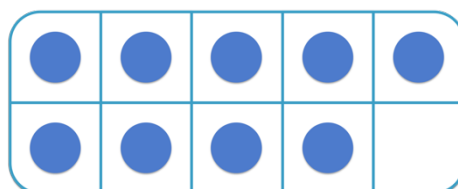
Complete the following tens frames to show the number bonds to 10.

a)



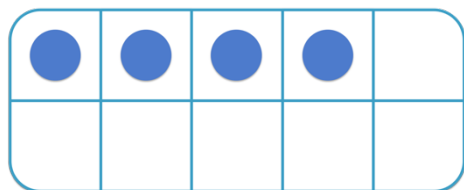
$$\underline{7} + \underline{\quad} = 10$$

b)



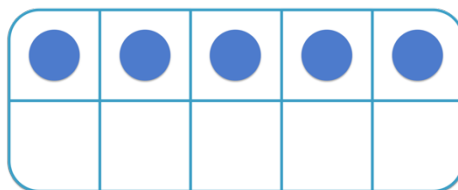
$$\underline{\quad} + \underline{\quad} = 10$$

c)



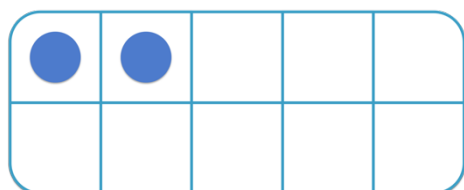
$$\underline{\quad} + \underline{\quad} = 10$$

d)



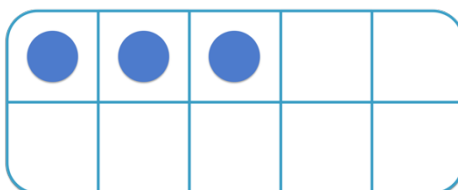
$$\underline{\quad} + \underline{\quad} = 10$$

e)



$$\underline{\quad} + \underline{\quad} = 10$$

f)



$$\underline{\quad} + \underline{\quad} = 10$$