


Naming 3D Shapes

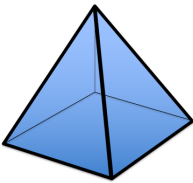
Answers

a)




Cylinder

b)



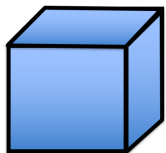
Pyramid

c)




Cone

d)



Cube

e)



Sphere

f)



Cuboid