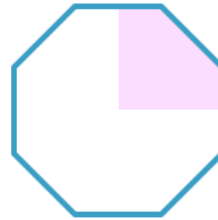


Finding One Quarter of a Shape

Answers



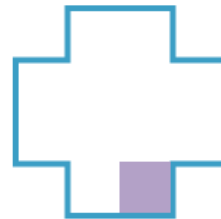
One quarter



One quarter



More than
one quarter



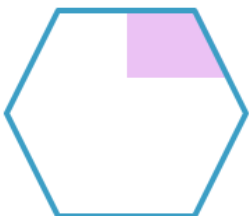
Less than
one quarter



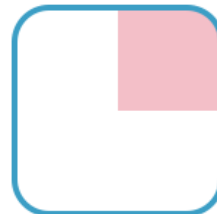
One quarter



More than
one quarter



Less than
one quarter



One quarter