

# Telling the Time

## Intervals of Five Minutes Past

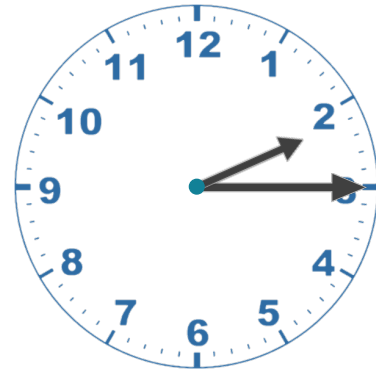
### Answers

a)



**Five past 11**

b)



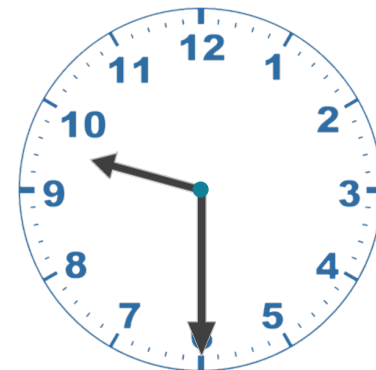
**Quarter past 2**

c)



**Twenty past 8**

d)



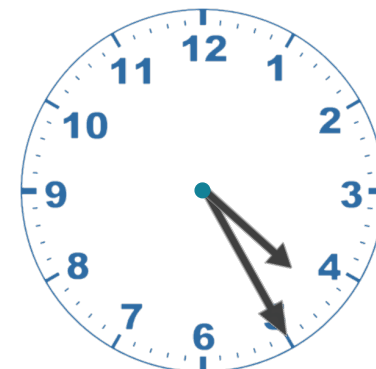
**Half past 9**

e)



**Ten past 10**

f)



**Twenty-five past 4**