

Telling the Time

All Minutes Past the Hour

Answers

a)



Nine minutes past 10

b)



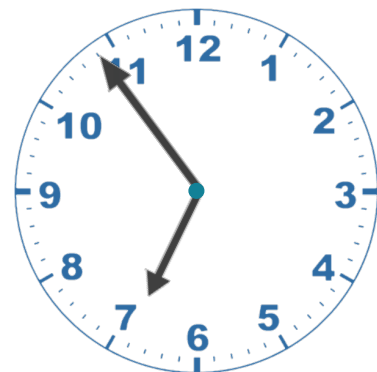
Thirty-four minutes past 4

c)



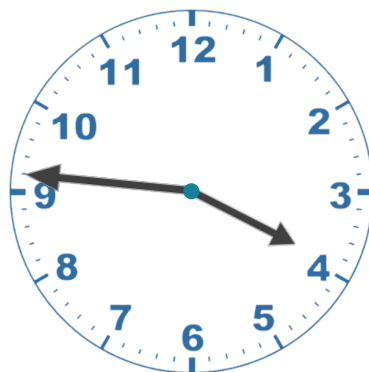
Twenty-nine minutes past 7

d)



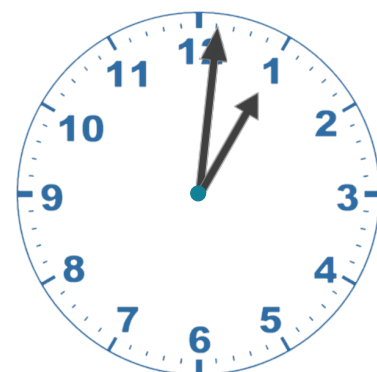
Fifty-four minutes past 6

e)



Forty-six minutes past 3

f)



One minute past 1