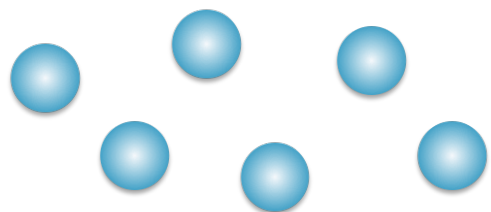


Division by Grouping

Accompanying activity sheet for video lesson

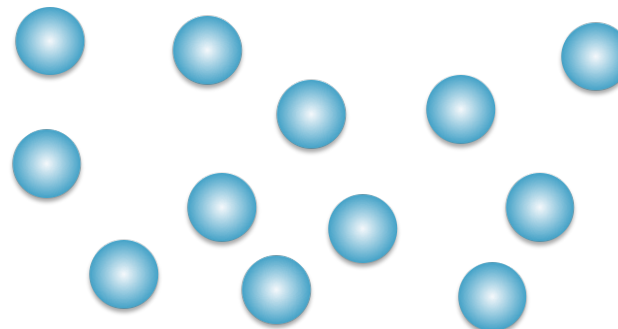
1

$$6 \div 3 = \boxed{}$$




2

$$12 \div 2 = \boxed{}$$



3

$$16 \div 4 = \boxed{}$$



4

$$15 \div 5 = \boxed{}$$

