

Introduction to Fractions

Shading in a fraction of a shape

Answers


a)

$$\frac{2}{3}$$




d)

$$\frac{3}{8}$$




b)

$$\frac{3}{4}$$




e)

$$\frac{6}{6}$$



c)

$$\frac{3}{6}$$



f)

$$\frac{5}{8}$$

