


Properties of 2D Shapes

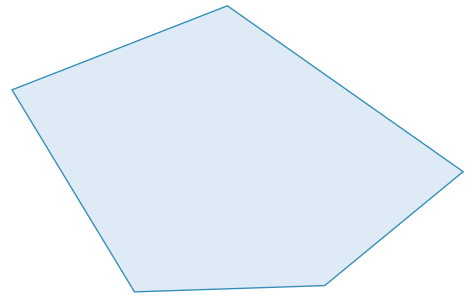
Describe the properties of the following 2D shapes and then write the name of each shape.

a)




Name: _____

c)




Name: _____

b)



Name: _____

d)



Name: _____