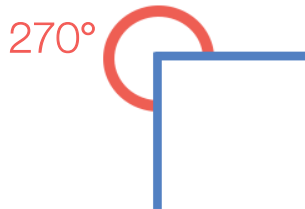


# Classifying Angles

Identify the type of angle shown and give a reason for your answer.

a)



Angle: \_\_\_\_\_

Reason: \_\_\_\_\_

\_\_\_\_\_

d)

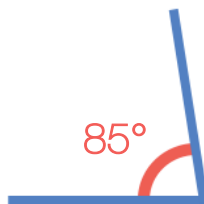


Angle: \_\_\_\_\_

Reason: \_\_\_\_\_

\_\_\_\_\_

b)




Angle: \_\_\_\_\_

Reason: \_\_\_\_\_

\_\_\_\_\_

e)




Angle: \_\_\_\_\_

Reason: \_\_\_\_\_

\_\_\_\_\_

c)



Angle: \_\_\_\_\_

Reason: \_\_\_\_\_

\_\_\_\_\_

f)



Angle: \_\_\_\_\_

Reason: \_\_\_\_\_

\_\_\_\_\_