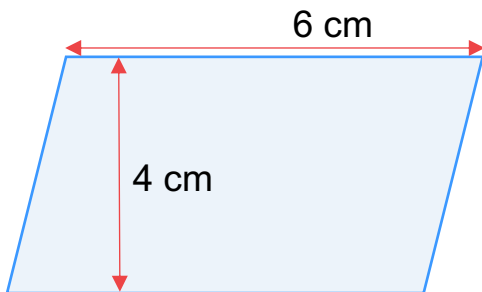


# Area of a Parallelogram: Answers

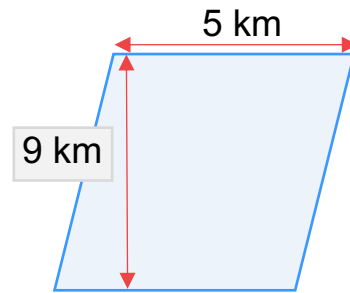
Find the areas of the following parallelograms:

a)



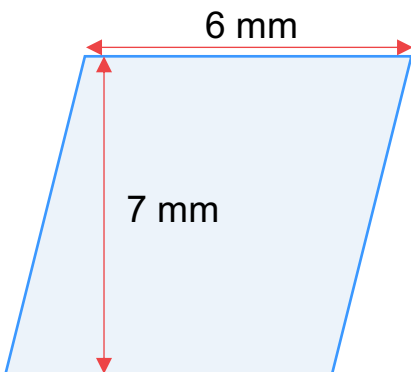
Area = **24 cm<sup>2</sup>**

b)




Area = **45 km<sup>2</sup>**

c)



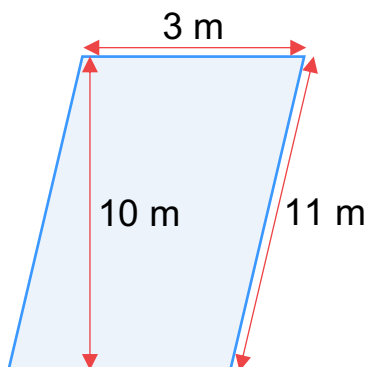
Area = **42 mm<sup>2</sup>**

d)



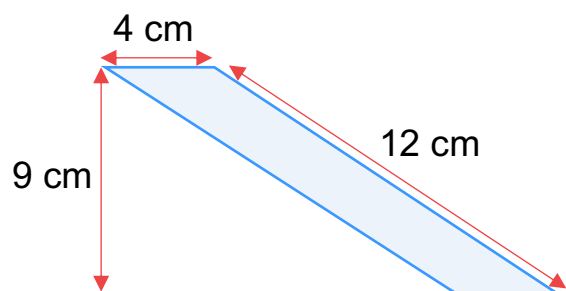
Area = **48 cm<sup>2</sup>**

e)



Area = **30 m<sup>2</sup>**

f)



Area = **36 cm<sup>2</sup>**